

NAME \_\_\_\_\_

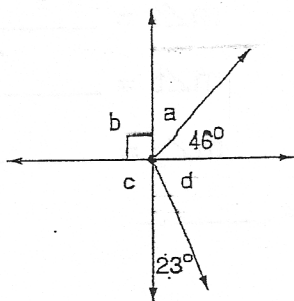
DATE \_\_\_\_\_

PERIOD \_\_\_\_\_

Pre-Algebra  
Finding Angle Measures

Find the measures of the angles.

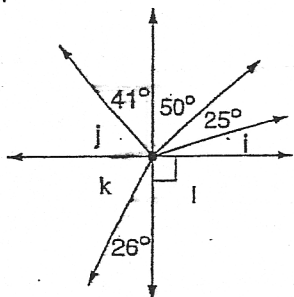
①



$m\angle a = \underline{\hspace{2cm}}$        $m\angle b = \underline{\hspace{2cm}}$

$m\angle c = \underline{\hspace{2cm}}$        $m\angle d = \underline{\hspace{2cm}}$

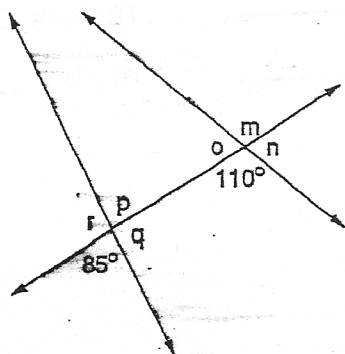
②



$m\angle i = \underline{\hspace{2cm}}$        $m\angle j = \underline{\hspace{2cm}}$

$m\angle k = \underline{\hspace{2cm}}$        $m\angle l = \underline{\hspace{2cm}}$

③

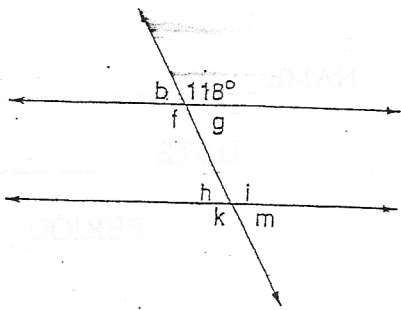


$m\angle m = \underline{\hspace{2cm}}$        $m\angle n = \underline{\hspace{2cm}}$

$m\angle o = \underline{\hspace{2cm}}$        $m\angle p = \underline{\hspace{2cm}}$

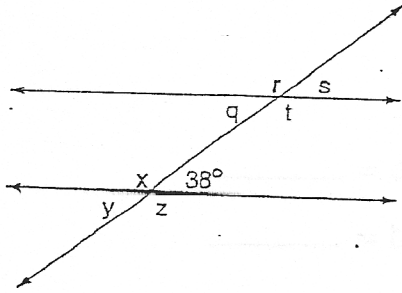
$m\angle q = \underline{\hspace{2cm}}$        $m\angle r = \underline{\hspace{2cm}}$

4



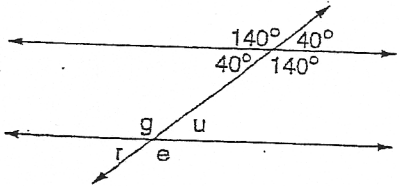
$m\angle b = \underline{\hspace{2cm}}$        $m\angle f = \underline{\hspace{2cm}}$   
 $m\angle g = \underline{\hspace{2cm}}$        $m\angle h = \underline{\hspace{2cm}}$   
 $m\angle i = \underline{\hspace{2cm}}$        $m\angle k = \underline{\hspace{2cm}}$   
 $m\angle m = \underline{\hspace{2cm}}$

5



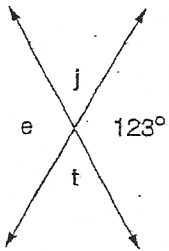
$m\angle r = \underline{\hspace{2cm}}$        $m\angle s = \underline{\hspace{2cm}}$   
 $m\angle q = \underline{\hspace{2cm}}$        $m\angle t = \underline{\hspace{2cm}}$   
 $m\angle x = \underline{\hspace{2cm}}$        $m\angle y = \underline{\hspace{2cm}}$   
 $m\angle z = \underline{\hspace{2cm}}$

6



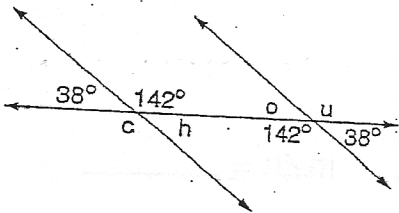
$m\angle g = \underline{\hspace{2cm}}$        $m\angle u = \underline{\hspace{2cm}}$   
 $m\angle e = \underline{\hspace{2cm}}$        $m\angle r = \underline{\hspace{2cm}}$

7



$m\angle j = \underline{\hspace{2cm}}$   
 $m\angle e = \underline{\hspace{2cm}}$   
 $m\angle t = \underline{\hspace{2cm}}$

8



$m\angle u = \underline{\hspace{2cm}}$        $m\angle o = \underline{\hspace{2cm}}$   
 $m\angle c = \underline{\hspace{2cm}}$        $m\angle h = \underline{\hspace{2cm}}$