

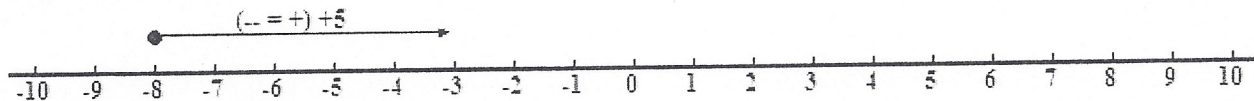
Number Line Subtraction (Integers)

Name _____
Period _____

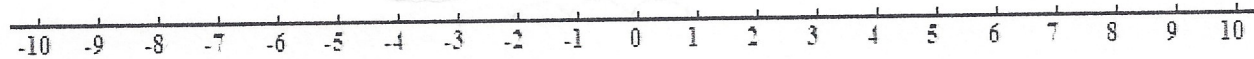
10/1/09 12:31 AM

Use the integer line to answer the questions below. The first one is done for you.

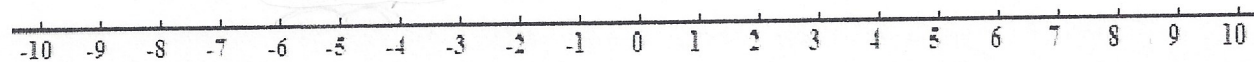
$-8 - (-5) = -3$



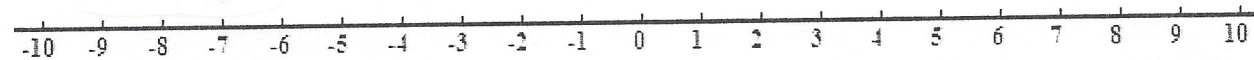
#2: $-4 - (-5) =$



#3: $-6 + 2 =$



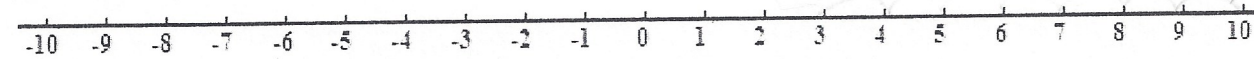
#4: $-7 - 2 =$



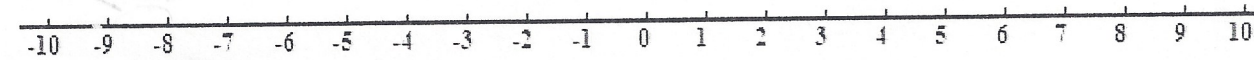
#5: $8 - 12 =$



#6: $3 - (-7) =$



#7: $-8 + (-1) =$



#8: $-4 - (-5) =$

