

Name _____

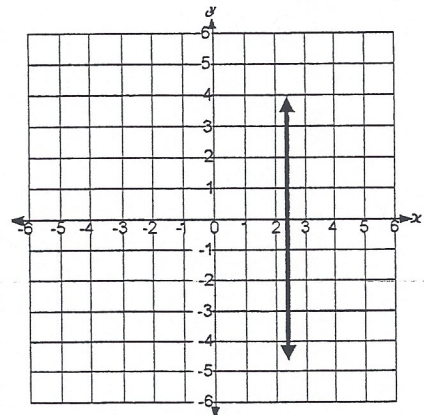
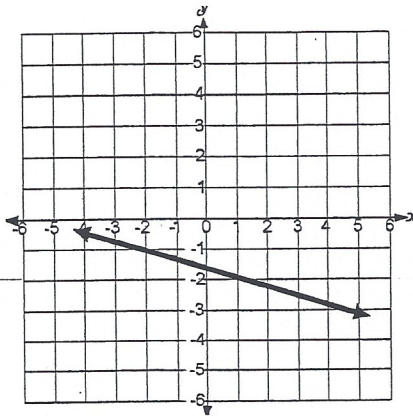
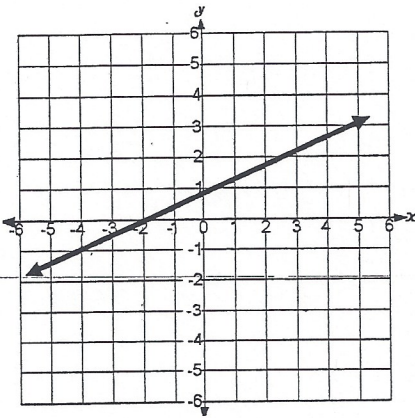
Properties of Slope

1. How do you read a line?

2. Fill in the table with the appropriate information.

Direction of the Line	Value of the Slope	Graphical Representation
Downhill		
Uphill		
Horizontal		
Vertical		

3. Determine the value of the slope of the following lines.



4. What does the slope tell you about the steepness of a line?