


NAME _____

PERIOD _____




REFRESH


Classify each angle as:

acute, right, obtuse, or straight.

①



④




②




⑤



③



⑥



Find the size of the third angle of each of these triangles.

- a. 30° and 86°
- b. 71° and 48°
- c. 46° and 105°