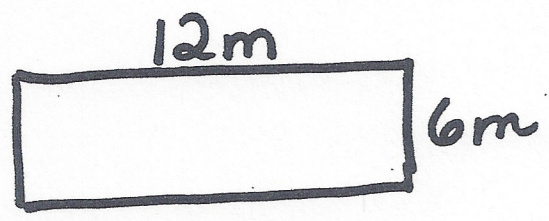


REFRESH

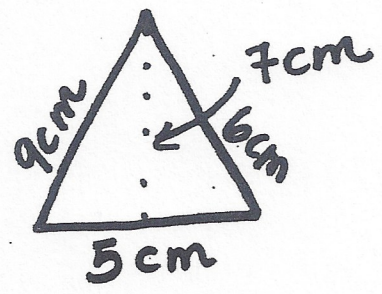
Find the area and perimeter.

1



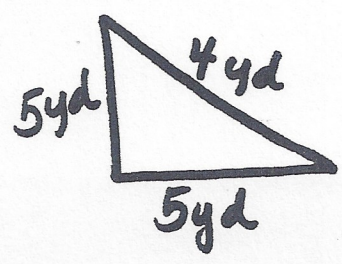
P =
A =

2



P =
A =


3



P =
A =

NAME _____

PERIOD _____



REFRESH

Add:

$$1) \quad \frac{2}{7} + \frac{3}{8} =$$

$$2) \quad 2\frac{1}{5} + 1\frac{2}{3} =$$

multiply:

$$3) \quad \frac{6}{11} \cdot \frac{1}{2} =$$

$$4) \quad 6\frac{3}{5} \cdot 2\frac{3}{11} =$$

subtract:

$$\frac{8}{9} - \frac{1}{6} =$$

$$3\frac{5}{7} - 1\frac{3}{4} =$$

Divide:

$$\frac{4}{5} \div \frac{1}{2} =$$

$$1\frac{1}{2} \div \frac{4}{12} =$$