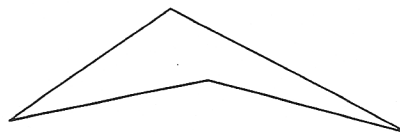
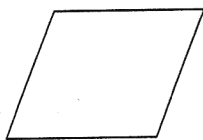
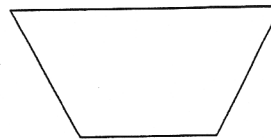



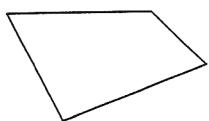


Name _____ Period _____

Properties of Quadrilaterals

After investigating the properties of quadrilaterals, parallelograms, rhombi, trapezoids, rectangles, and kites, use your information to identify and label each of the following quadrilaterals, using the list of properties below. More than one quadrilateral may have the stated properties.



Place the number next to the quadrilaterals that have the stated properties.

This quadrilateral has...

1. four right angles
2. exactly one pair of parallel sides
3. two pair of opposite sides congruent
4. four congruent sides
5. two pair of opposite sides parallel
6. no sides congruent
7. two pair of adjacent sides congruent, but not all sides congruent
8. perpendicular diagonals
9. opposite angles congruent
10. diagonals bisect each other
11. four sides
12. four congruent angles
13. four congruent sides and four congruent angles.