
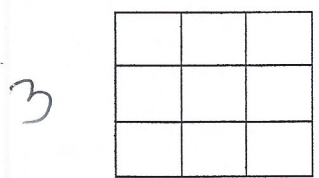
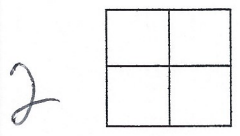
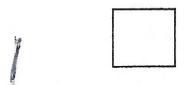


Name _____ Period _____

Number Patterns

Continue the pattern using shapes. Draw 3 more terms in the pattern.



What kind of number sequence is this? _____
Write the sequence _____
Is there a rule for this pattern? If so, what is it? _____

Look at the number sequence below:

1 3 6 10 15 21

Can you take this number sequence and represent it in picture form? Try that here. Draw the first 6 numbers.

What kind of number sequence is this? _____

Give the next 3 terms of the sequence (following 21) _____

Is there a rule for this pattern? If so, what is it? _____