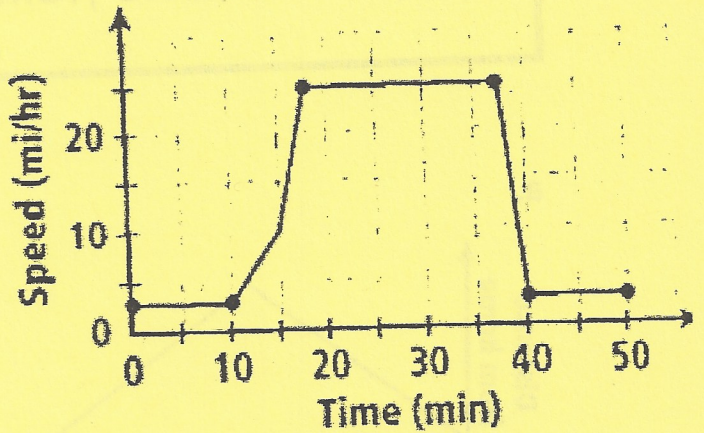


# Emma and Her Horse

The graph below shows the varying speeds at which Emma exercises her horse. Let's look at the graph and try to interpret what is happening.



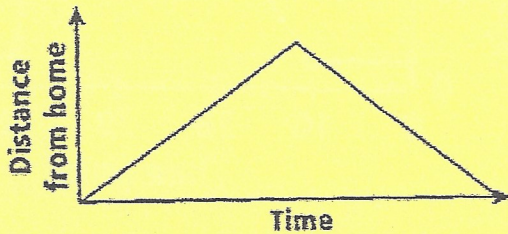
- 1) Read the axes names. Look at the intervals. What do you see?
- 2) Divide the graph into sections.
- 3) Write something about each section.

# JUSTIN GOES TO THE BEACH

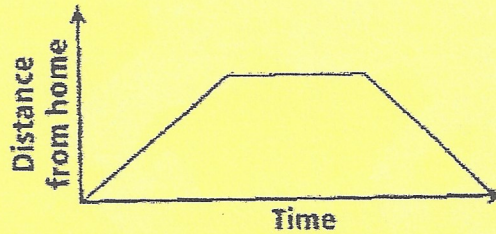
Justin takes a trip to the beach. He stays at the beach all day before driving back home. Which graph best shows the story below?

As Justin drives to the beach, his distance from home increases. While he is at the beach, his distance from home is constant. As he returns home, his distance from home decreases.

a.



b.



c.

