

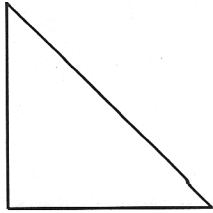
Identifying Triangles

5.5

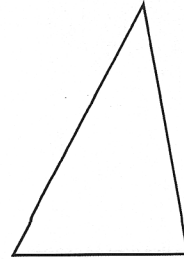
Name _____ Date _____

Directions: Identify the name of each triangle below. If the triangle has more than one name, use all names.

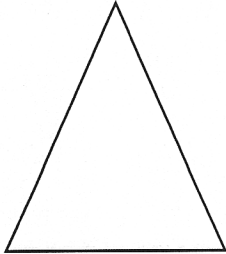
1.



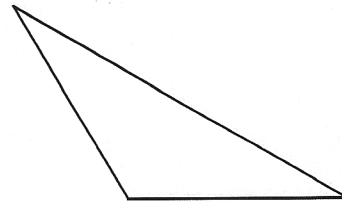
5.



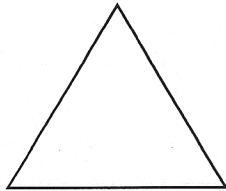
2.



6.



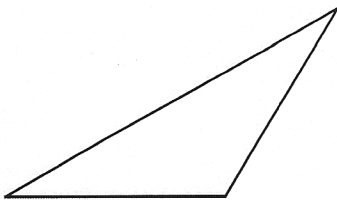
3.



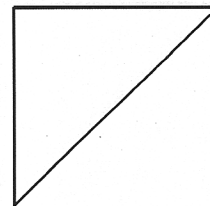
7.



4.

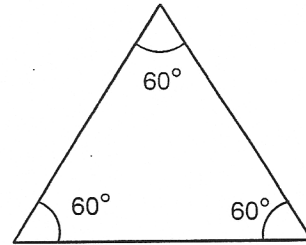


8.



Directions: Write the correct answer to each question.

1. What is the name of this triangle by the size of its angles? _____
2. What is the name of this triangle by the length of its sides? _____
3. What is the name of this triangle by the size of its angles? _____
4. What is the name of this triangle by the length of its sides? _____
5. What is the name of this triangle by the size of its angles? _____
6. What is the name of this triangle by the length of its sides? _____
7. What is the name of this triangle by the size of its angles? _____
8. What is the name of this triangle by the length of its sides? _____
9. What is the name of this triangle by the size of its angles? _____
10. What is the name of this triangle by the length of its sides? _____
11. What is the name of this triangle by the size of its angles? _____
12. What is the name of this triangle by the length of its sides? _____



D

Side $DE =$ Side EF

E F

