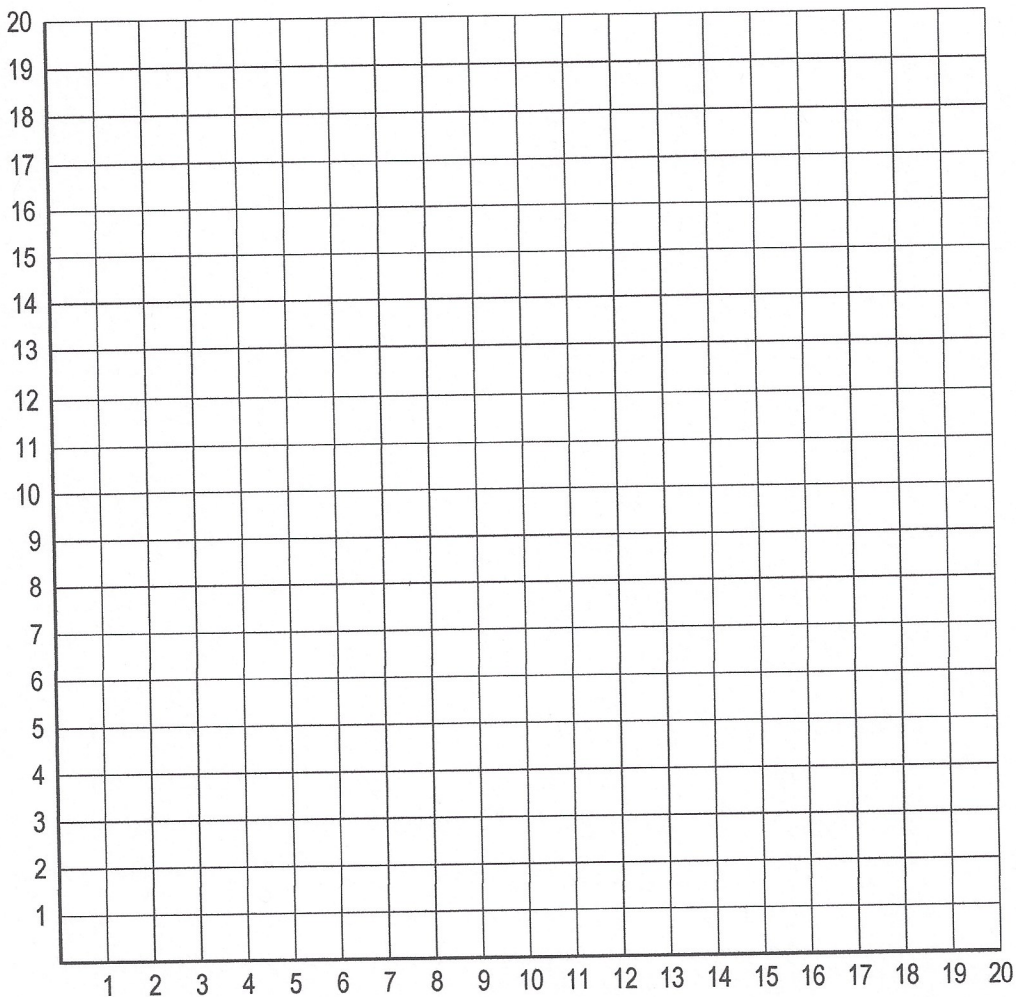


Coordinate Picture

Name: _____ Date: _____



There is a picture hidden in this grid. Connect the points with lines to reveal it.



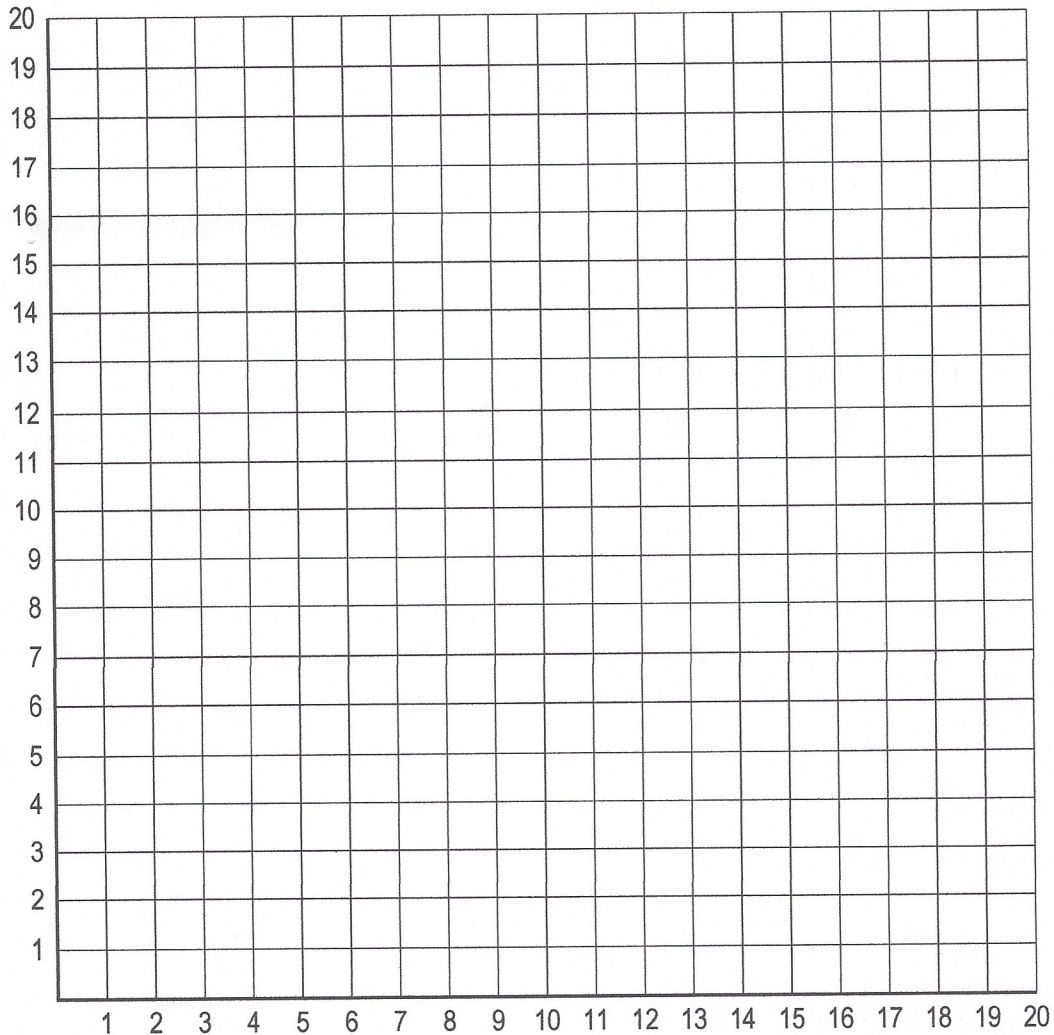
Line 1: (10,10), (12,7), (8,7), (10,10) **Line 2:** (2,6), (5,3), (7,4), (8,3), (9,4), (10,4), (11,3), (12,4), (13,3), (14,4), (15,3), (18,6), (16,6), (15,5), (14,6), (12,5), (11,6), (9,5), (7,6), (6,5), (5,6), (2,6) **Line 3:** (3,10), (5,10), (5,11), (6,11), (7,10), (8,10), (8,11), (7,12), (4,12), (3,11), (3,10) **Line 4:** (12,16), (11,17), (10,19), (9,20), (6,20), (7,19), (9,19), (9,17), (8,16) **Line 5:** (12,10), (12,11), (13,12), (16,12), (17,11), (17,10), (15,10), (15,11), (14,11), (13,10), (12,10) **Line 6:** (6,0), (4,1), (2,3), (1,5), (0,8), (0,10), (1,13), (3,15), (6,16), (8,16), (10,15), (12,16), (14,16), (17,15), (19,13), (20,10), (20,8), (19,5), (18,3), (16,1), (14,0), (6,0)

Coordinate Picture

Name: _____ Date: _____



There is a picture hidden in this grid. Connect the points with lines to reveal it.



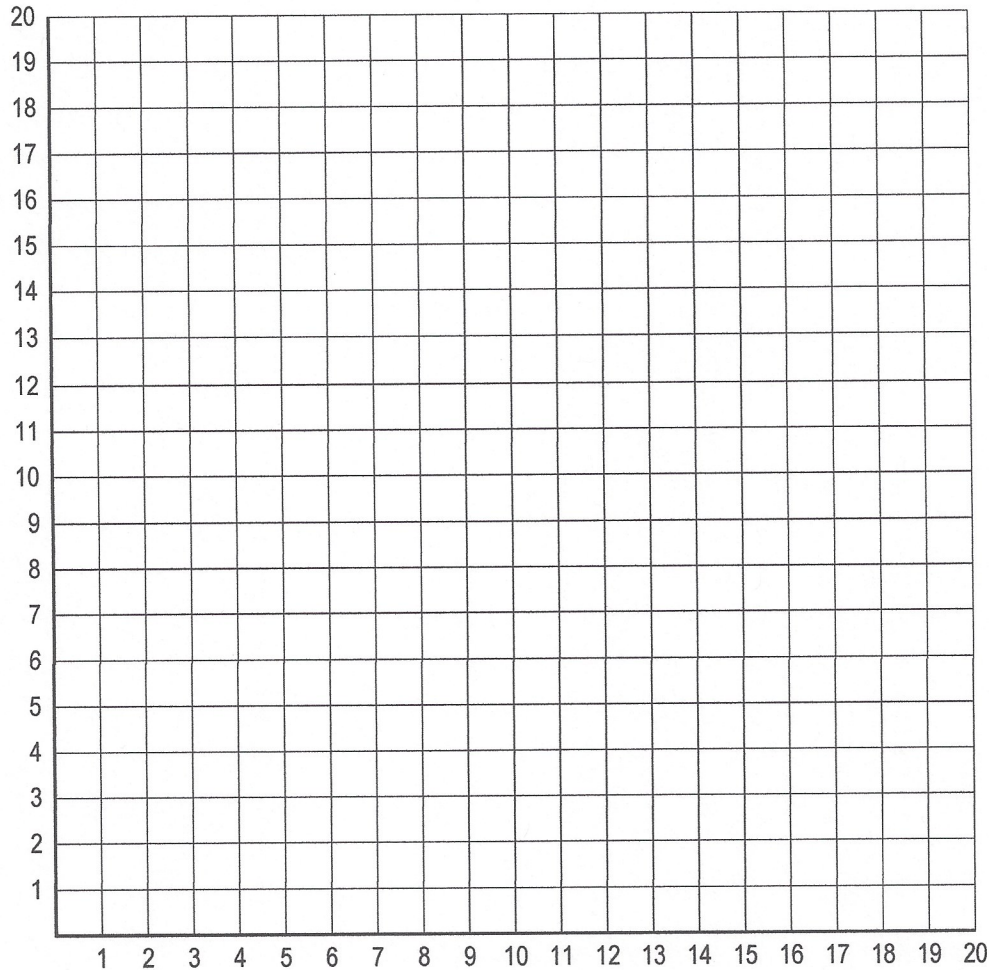
Line 1: (9,0), (10,4), (8,3), (7,3), (4,4), (5,5), (2,7), (3,7), (2,9), (2,11), (4,10); (5,10), (7,9), (3,13), (5,14), (4,16), (5,16), (5,20), (6,18), (8,18), (9,16), (10,18), (11,16), (11,12), (12,15), (13,15), (14,17), (15,15), (16,15), (15,12), (16,12), (16,11), (14,8), (17,8), (16,6), (14,5), (15,4), (14,3), (13,3), (11,4), (10,4), (10,7), (9,11), (6,17) **Line 2:** (9,11), (6,12), (5,13) **Line 3:** (4,9), (8,6), (10,5), (12,7), (13,10), (14,15) **Line 4:** (15,7), (13,6), (11,6), (11,9), (12,11) **Line 5:** (8,13), (9,14), (10,16) **Line 6:** (7,15), (8,17) **Line 7:** (11,9), (10,10) **Line 8:** (8,6), (7,5), (5,4)

Coordinate Picture

Name: _____ Date: _____



There is a picture hidden in this grid. Connect the points with lines to reveal it.



Line 1: (10,7), (10,8), (9,9), (8,9), (7,8) **Line 2:** (6,14), (7,14), (7,13), (6,13), (5,12), (5,13), (6,14) **Line 3:** (10,8), (11,9), (12,9), (13,8) **Line 4:** (10,13), (11,12), (11,11), (10,10), (9,11), (9,12), (10,13) **Line 5:** (7,12), (8,13), (8,14), (7,15) **Line 6:** (7,8), (7,3), (6,3), (5,2), (5,0), (9,0), (9,5), (10,7), (11,5), (11,0), (15,0), (15,2), (14,3), (13,3), (13,8) **Line 7:** (12,9), (13,12), (14,12), (15,10), (15,8), (14,7), (14,5), (15,5), (15,6), (16,6), (16,5), (17,5), (17,7), (16,8), (16,13), (14,15), (12,15), (12,16), (13,16), (14,17), (14,19), (13,20), (7,20), (6,19), (6,17), (7,16), (8,16), (8,15), (6,15), (4,13), (4,8), (3,7), (3,5), (4,5), (4,6), (5,6), (5,5), (6,5), (6,7), (5,8), (5,10), (6,12), (7,12), (8,9) **Line 8:** (8,19), (7,18), (8,17), (9,17), (9,19), (8,19) **Line 9:** (12,8), (12,5), (11,7), (11,8), (12,8) **Line 10:** (9,8), (8,8), (8,5), (9,7), (9,8) **Line 11:** (11,19), (12,19), (13,18), (12,17), (11,17), (11,19) **Line 12:** (10,17), (9,16), (10,15), (11,16), (10,17) **Line 13:** (13,15), (12,14), (12,13), (13,12) **Line 14:** (13,14), (13,13), (14,13), (15,12), (15,13), (14,14), (13,14)