

The ordered pairs in the input/output table represent coordinates that will graph onto the coordinate plane. Graph the tables in this exercise and label each graph with its problem number.

1.)

x	y
-2	0
-1	1
0	2
1	3
2	4

2.)

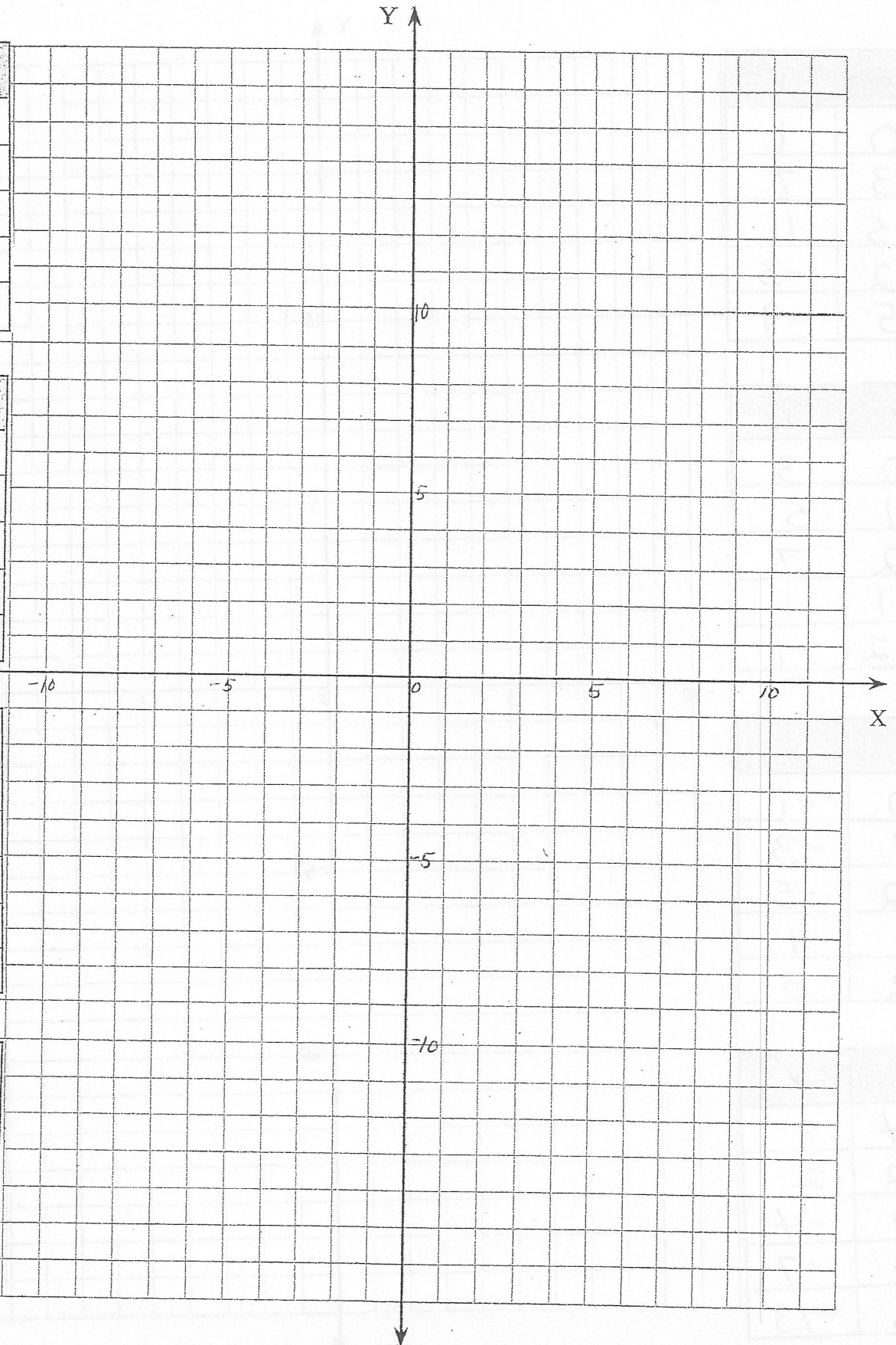
x	y
1	-3
2	-2
-1	-5
-2	-6
0	-4

3.)

x	y
-1	7
0	5
2	1
3	-1
6	-7

4.)

x	y
0	3
-1	4
1	2
-6	9
3	0

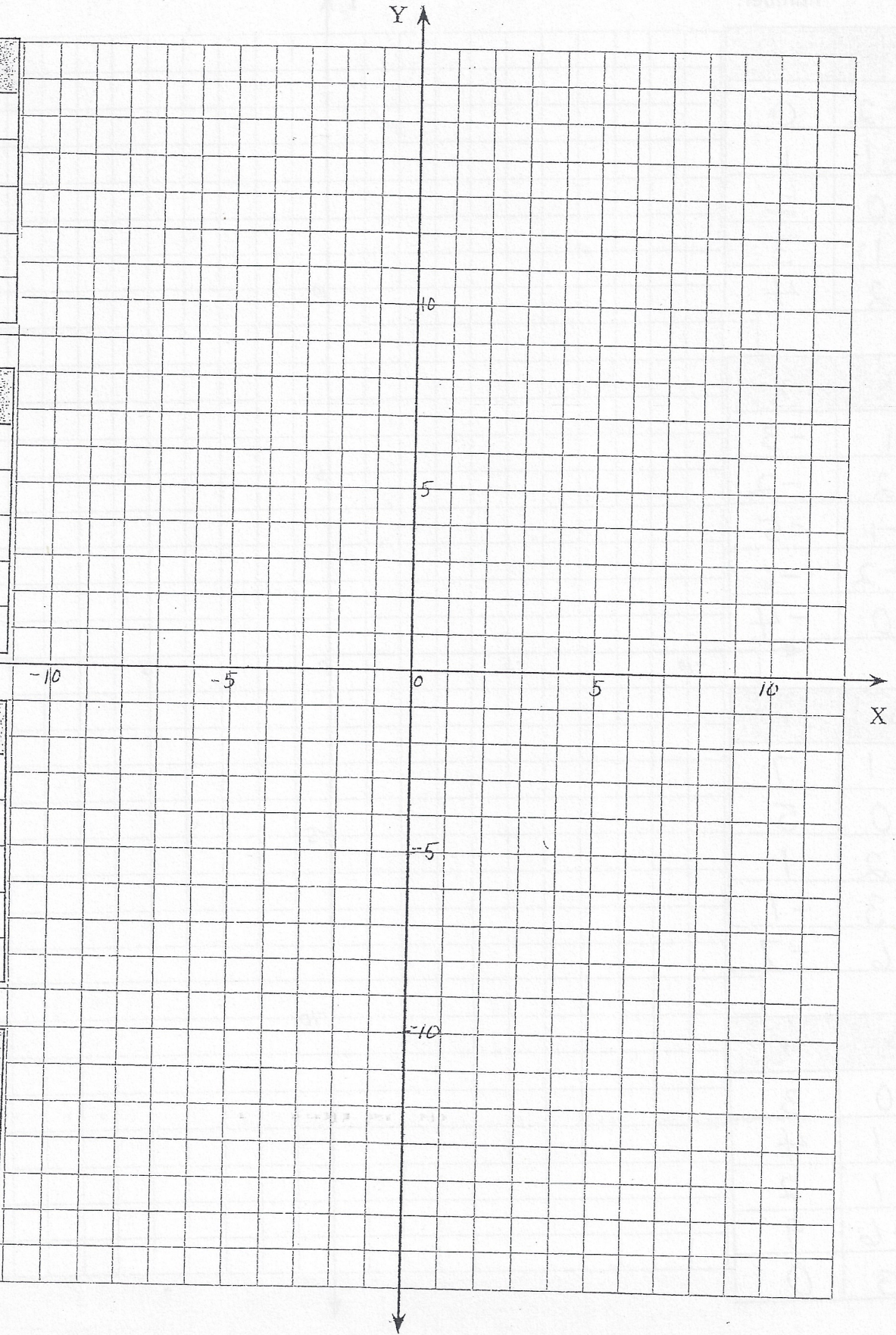


x	y
0	1
-3	7
-5	11
2	-3
5	-9

x	y
0	3
1	5
2	7
-1	1
-2	-1

x	y
0	-1
-1	-3
-2	-5
1	1
2	3

x	y
-4	8
-2	2
0	-4
1	-7
3	-13

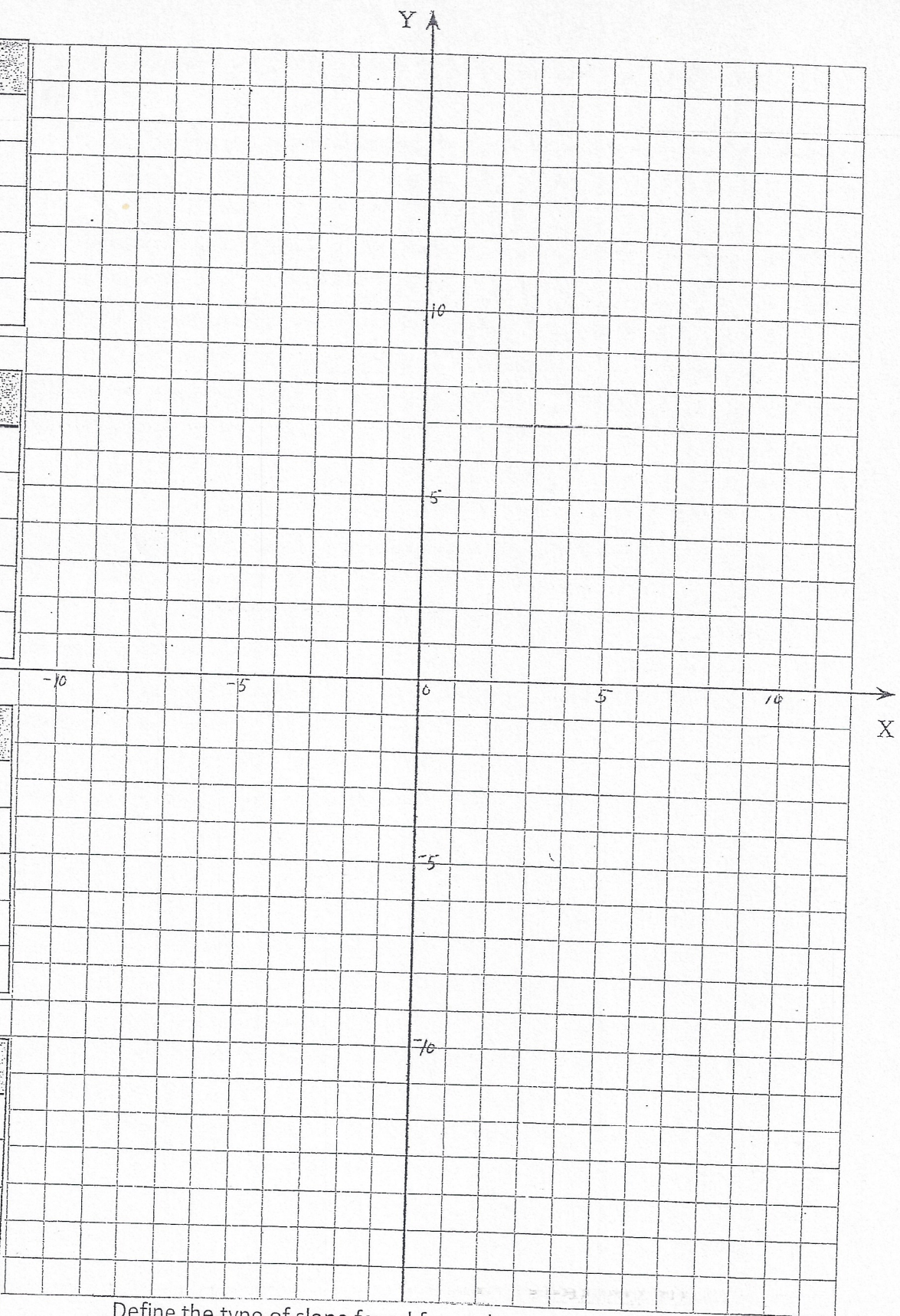


x	y
0	4
-2	4
2	4
-3	4
5	4

x	y
-5	-1
-5	0
-5	1
-5	4
-5	6

x	y
-1	-1
0	-1
1	-1
-2	-1
5	-1

x	y
2	6
2	0
2	4
2	8
2	-1



Define the type of slope found for each graph.

1. \_\_\_\_\_
2. \_\_\_\_\_
3. \_\_\_\_\_
4. \_\_\_\_\_
5. \_\_\_\_\_
6. \_\_\_\_\_
7. \_\_\_\_\_
8. \_\_\_\_\_
9. \_\_\_\_\_
10. \_\_\_\_\_
11. \_\_\_\_\_
12. \_\_\_\_\_