

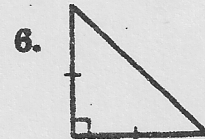
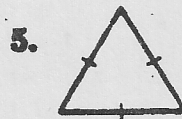
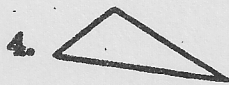

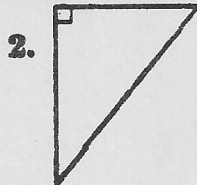

NAME \_\_\_\_\_

DATE \_\_\_\_\_


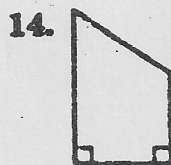
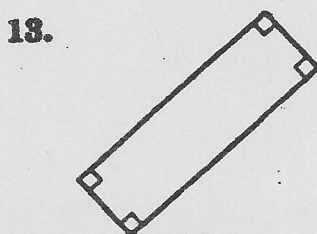
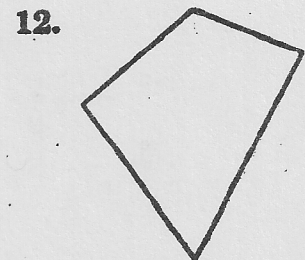

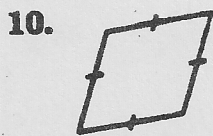
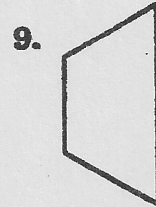
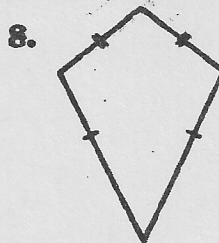
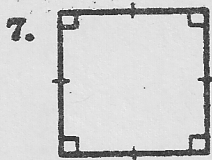
PERIOD \_\_\_\_\_

**PRE-ALGEBRA**  
**Chapter 10-6**  
**TRIANGLES AND QUADRILATERALS**

*Classify each triangle by its sides and by its angles.*



*Name every quadrilateral that describes each figure. Then state which name best describes the figure.*



16. Which quadrilaterals have four congruent sides?

17. A figure is a rectangle but not a rhombus. Draw the figure.